


CALCULS : vers la multiplication



1 Ecris le nombre de hérissons de plusieurs façons :

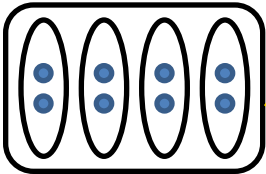
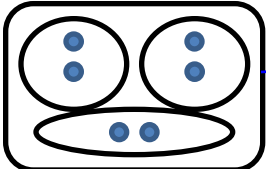
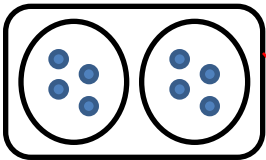


$$\underline{5} + \underline{5} + \underline{5} = \underline{15}$$

$$\underline{3} + \underline{3} + \underline{3} + \underline{3} + \underline{3} = \underline{15}$$

On peut aussi écrire : $\underline{3} \times \underline{5}$ ou $\underline{5} \times \underline{3}$

2 Relie chaque dessin à la multiplication qui convient :



$$4 \times 2$$

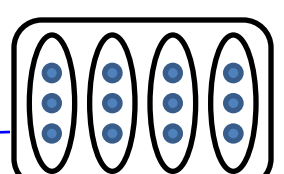
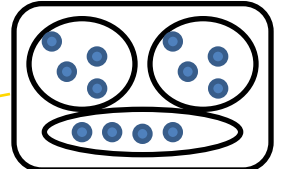
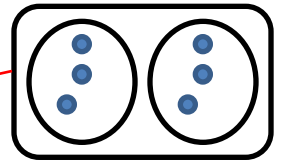
$$2 \times 3$$

$$3 \times 2$$

$$3 \times 4$$

$$2 \times 4$$

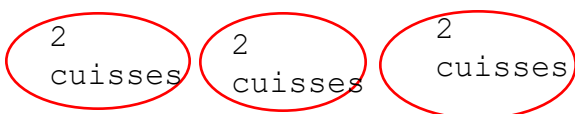
$$4 \times 3$$



Problème :

Un poulet rôti a 2 cuisses.
Maman a acheté 3 poulets.
Combien y a-t-il de cuisses en tout?

dessin ou calcul :



$$2 + 2 + 2 = 3 \times 2 = 6$$

phrase réponse :

Il y a 6 cuisses en tout.