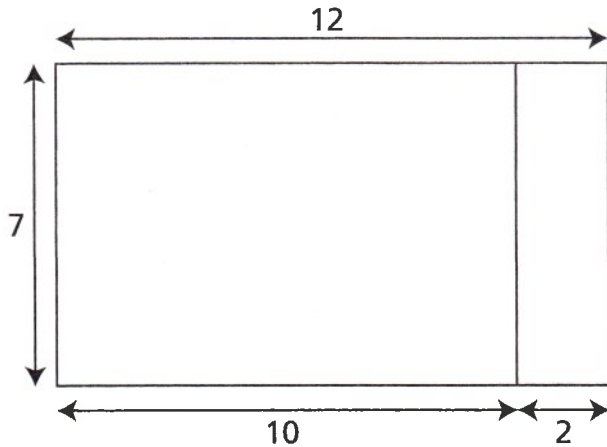


Prénom Date

1 Julie et Léo calculent 12×7 .

Observe et complète leurs calculs.

Julie

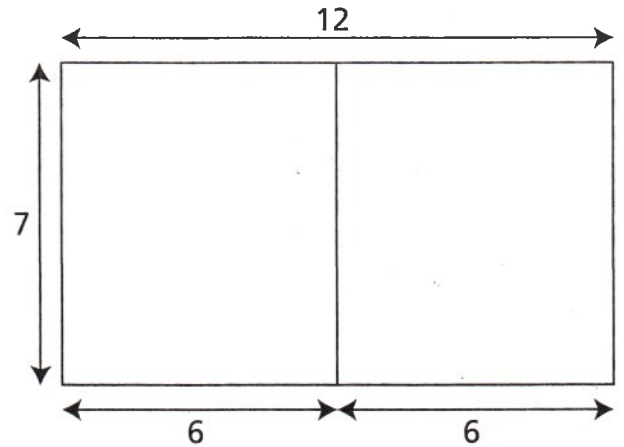


$12 \times 7 = \dots \times \dots + \dots \times \dots$

$12 \times 7 = \dots + \dots$

$12 \times 7 = \dots$

Léo



$12 \times 7 = \dots \times \dots + \dots \times \dots$

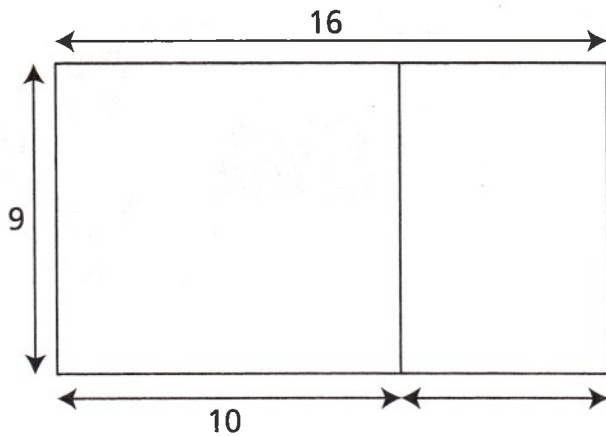
$12 \times 7 = \dots + \dots$

$12 \times 7 = \dots$

2 Julie et Léo calculent 16×9 .

Observe et complète leurs calculs.

Julie

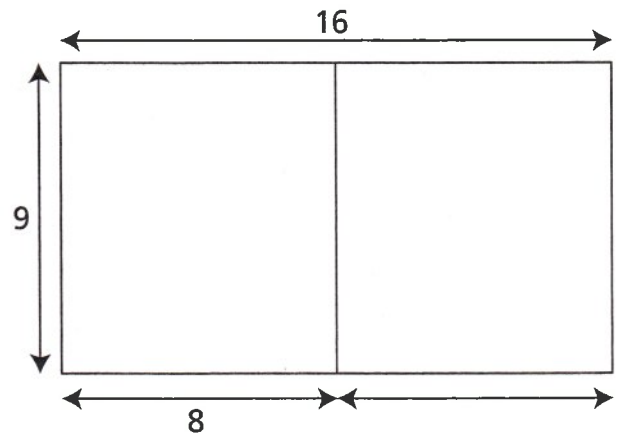


$16 \times 9 = \dots \times \dots + \dots \times \dots$

$16 \times 9 = \dots + \dots$

$16 \times 9 = \dots$

Léo



$16 \times 9 = \dots \times \dots + \dots \times \dots$

$16 \times 9 = \dots + \dots$

$16 \times 9 = \dots$